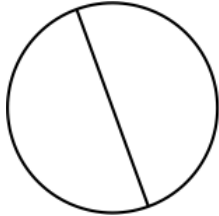


Circle Worksheet

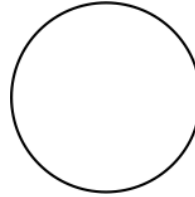
1 a.



$$d = 5.1 \text{ mm}$$

Calculate the circumference of the circle.

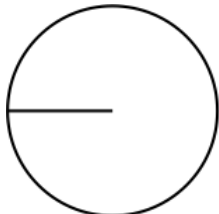
1 b.



$$d = 6.1 \text{ cm}$$

Calculate the circumference of the circle.

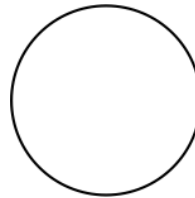
2 a.



$$r = 4.7 \text{ m}$$

Calculate the circumference of the circle.

2 b.



$$d = 3.9 \text{ yd}$$

Calculate the circumference of the circle.